

Narýsuj úsečky dané délky:

$$IUVI = 5 \text{ cm}$$

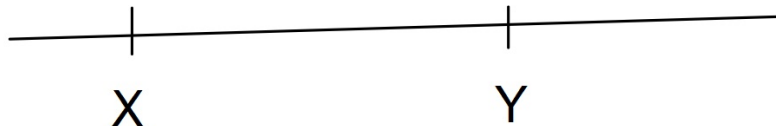
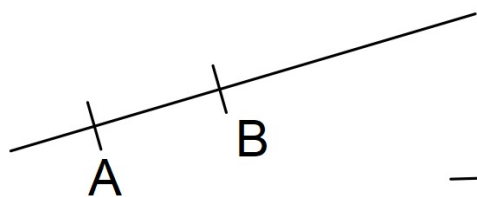
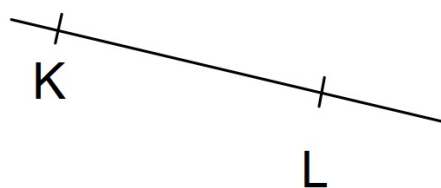


$$IXYI = 7 \text{ cm}$$

$$IABI = 2 \text{ cm } 5 \text{ mm}$$

$$ICDI = 6 \text{ cm } 3 \text{ mm}$$

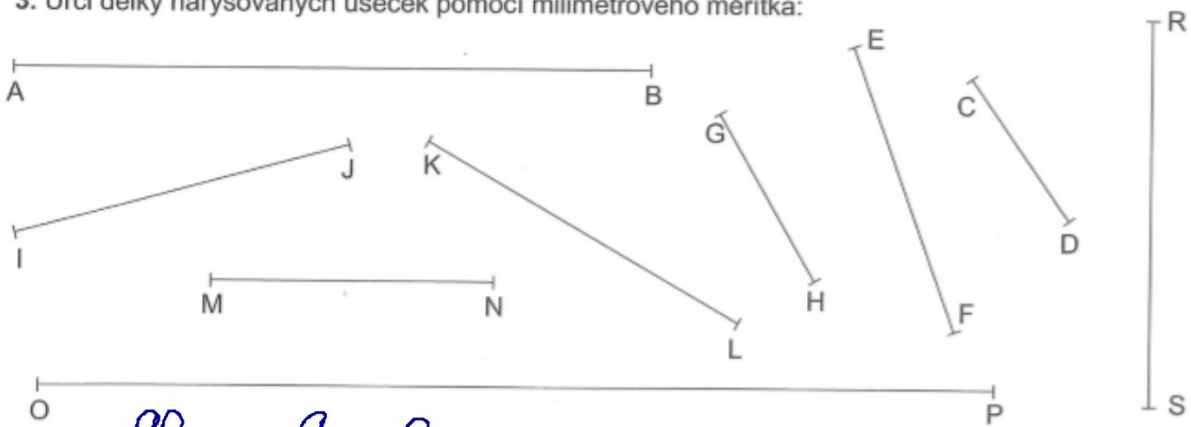
$$IIJI = 30 \text{ mm}$$

$$IKLI = 50 \text{ mm}$$



35/3

3. Urči délky narysovaných úseček pomocí milimetrového měřítka:



$IAB = 92$ mm = 9 cm 2 mm
 $IEFI = 45$ mm = 4 cm 5 mm
 $IJI = 50$ mm = 5 cm 0 mm
 $IMNI = 41$ mm = 4 cm 1 mm
 $IRSI = 56$ mm = 5 cm 6 mm

$ICDI = 25$ mm = 2 cm 5 mm
 $IGHI = 28$ mm = 2 cm 8 mm
 $IKLI = 52$ mm = 5 cm 2 mm
 $IOPI = 139$ mm = 13 cm 9 mm

Seřaď úsečky podle jejich délky: _____

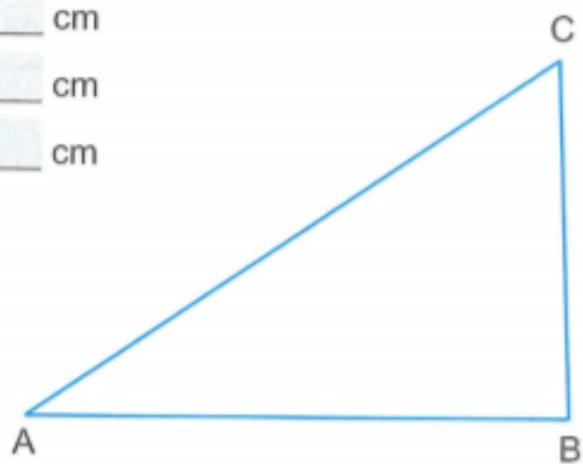
35/4

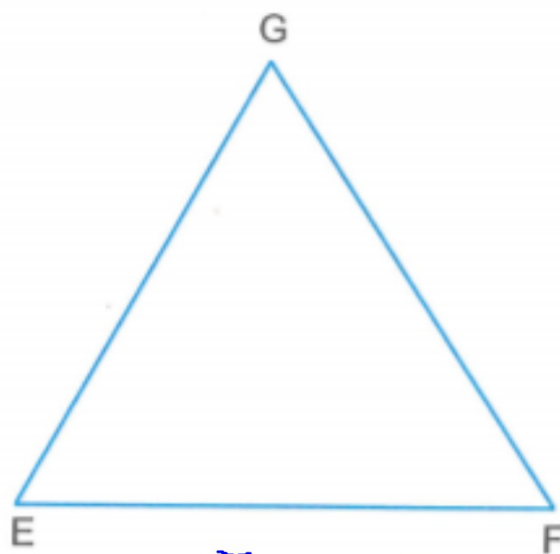
4. Urči délky stran narysovaných trojúhelníků a obdélníků:

$$|AB| = \underline{6} \text{ cm}$$


$$|BC| = \underline{4} \text{ cm}$$

$$|AC| = \underline{7} \text{ cm}$$






$$\begin{aligned} \text{IEFI} &= \underline{55} \text{ mm} = \underline{5} \text{ cm} \underline{5} \text{ mm} \\ \text{IFGI} &= \underline{53} \text{ mm} = \underline{5} \text{ cm} \underline{3} \text{ mm} \\ \text{IGEI} &= \underline{52} \text{ mm} = \underline{5} \text{ cm} \underline{2} \text{ mm} \end{aligned}$$



$$\begin{aligned} \text{IHII} &= \underline{62} \text{ mm} = \underline{6} \text{ cm} \underline{2} \text{ mm} \\ \text{IIJI} &= \underline{33} \text{ mm} = \underline{3} \text{ cm} \underline{3} \text{ mm} \\ \text{IJKI} &= \underline{62} \text{ mm} = \underline{6} \text{ cm} \underline{2} \text{ mm} \\ \text{IKHI} &= \underline{33} \text{ mm} = \underline{3} \text{ cm} \underline{3} \text{ mm} \end{aligned}$$



$$\begin{aligned}
 \text{ILMI} &= \underline{73} \text{ mm} = \underline{7} \text{ cm} \underline{3} \text{ mm} \\
 \text{IMNI} &= \underline{19} \text{ mm} = \underline{1} \text{ cm} \underline{9} \text{ mm} \\
 \text{INOI} &= \underline{73} \text{ mm} = \underline{7} \text{ cm} \underline{3} \text{ mm} \\
 \text{IOLI} &= \underline{19} \text{ mm} = \underline{1} \text{ cm} \underline{9} \text{ mm}
 \end{aligned}$$