

Násobení mimo rozsah násobilky

$6 \cdot 10 = 60$

$9 \cdot 3 = 27$

$10 \cdot 5 = 50$

$2 \cdot 9 = 18$

$9 \cdot 1 = 9$

$3 \cdot 6 = 18$

$2 \cdot 2 = 4$

$5 \cdot 7 = 35$

$5 \cdot 0 = 0$

$1 \cdot 4 = 4$

$10 \cdot \boxed{8} = 80$

$\boxed{1} \cdot 9 = 9$

$\boxed{0} \cdot 7 = 0$

$8 \cdot \boxed{2} = 16$

$\boxed{0} \cdot 8 = 0$

$\boxed{3} \cdot 6 = 18$

$5 \cdot \boxed{5} = 25$

$9 \cdot \boxed{0} = 0$

$\boxed{9} \cdot 1 = 9$

$7 \cdot \boxed{10} = 70$

$33 : 3 = 11$

$72 : 4 = 18$

$36 : 2 = 18$

$51 : 3 = 17$

$76 : 4 = 19$

$99 : 9 = 11$

$88 : 8 = 11$

$26 : 2 = 13$

$48 : 3 = 16$

$85 : 5 = 17$

$$\begin{array}{r} 72 \\ \swarrow \quad \searrow \\ 40 \quad 32 \\ \begin{array}{r} \cdot \\ 4 \\ = \\ 10 \end{array} \quad \begin{array}{r} \cdot \\ 4 \\ = \\ 8 \end{array} \\ \swarrow \quad \searrow \\ + \\ 18 \end{array}$$

$65 : 5 = 13$

$30 : 2 = 15$

$84 : 7 = 12$

$56 : 4 = 14$

$90 : 6 = 15$

$$36 : 2 =$$



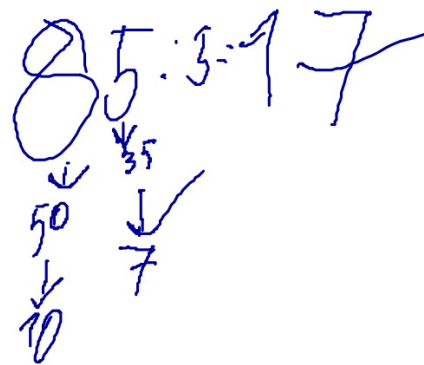
$$51 : 3 =$$



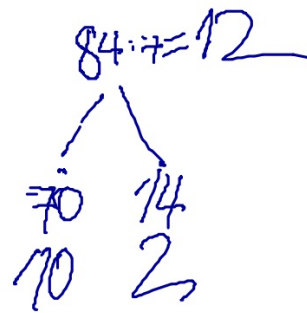
$$76 : 4 =$$




$$48 : 3 =$$



$$65 : 5 = 13$$



$$56 : 4 = 14$$



21. Vypočítej matematický řetězec:

